



ACS USNCO
U.S. National Chemistry Olympiad

2021 U.S. NATIONAL CHEMISTRY OLYMPIAD NATIONAL EXAM PART I

Prepared by the American Chemical Society Chemistry Olympiad Examinations Task Force

OLYMPIAD EXAMINATIONS TASK FORCE

Seth N. Brown, **Chair**, *University of Notre Dame*, Notre Dame, IN

James Ayers, *Colorado Mesa University*, Grand Junction, CO

Jerry Bell, *Simmons University*, Boston, MA (retired)

Mark DeCamp, *University of Michigan*, Dearborn, MI (retired)

James Dohm, *ExxonMobil*, Houston, TX

Xu Duan, *Holton-Arms School*, Bethesda, MD

Valerie Ferguson, *Moore HS*, Moore, OK

Julie Furstenau, *Thomas B. Doherty HS*, Colorado Springs, CO (retired)

Kimberly Gardner, *United States Air Force Academy*, CO

Paul Groves, *South Pasadena HS*, South Pasadena, CA (retired)

John Kotz, *State University of New York*, Oneonta, NY (retired)

Sarah Leite, *Hopkins School*, New Haven CT

Michael A. Morgan, *Francisco Bravo Medical Magnet HS*, Los Angeles, CA

Jane Nagurney, *Scranton Preparatory School*, Scranton, PA (retired)

Sheila Nguyen, *Claremont Graduate University*, Claremont, CA

The 2021 National Examination was modified so it could be conducted digitally. The following describes this exam as given this year. Part III was removed from the examination, and time limits remained the same for Part I and Part II. This file was published for record keeping purposes after the examination was complete.

The periodic table and other useful information, as shown on page 2 of this document, were included for student reference on both Part I and Part II.

National Exam Nominee agreement forms, which required students to certify that they are either U.S. citizens or permanent residents, were collected prior to the administration of Part I.

For Part I and Part II, students were permitted to use only non-programmable calculators. The use of a programmable calculator, or accessing information outside of the standard reference document, was grounds for disqualification.

Part I of this test was administered through the ACS Learning Center and consisted of 60 multiple-choice questions. Answers were entered using this system and only submitted answers were considered (i.e. no scratch paper was accepted). This test was held for the majority of students on Saturday, April 17, 2021. The time limit was **one hour and thirty minutes**.

Part II was administered solely to the top 200 performing students on Part I. A similar document, describing the variations in exam administration and formatted similarly to previous years, will be published separately. The time limit for this part of the exam, which included 8 questions, remained at **one hour and forty-five minutes**.

Invitation to take Part II did NOT signify that a student earned the honors or high honors recognitions. As always, these consider performance on the full examination.

ABBREVIATIONS AND SYMBOLS					
amount of substance	<i>n</i>	Faraday constant	<i>F</i>	molar mass	<i>M</i>
ampere	<i>A</i>	free energy	<i>G</i>	mole	mol
atmosphere	atm	frequency	ν	Planck's constant	<i>h</i>
atomic mass unit	<i>u</i>	gas constant	<i>R</i>	pressure	<i>P</i>
Avogadro constant	N_A	gram	<i>g</i>	rate constant	<i>k</i>
Celsius temperature	°C	hour	<i>h</i>	reaction quotient	<i>Q</i>
centi- prefix	<i>c</i>	joule	<i>J</i>	second	<i>s</i>
coulomb	<i>C</i>	kelvin	<i>K</i>	speed of light	<i>c</i>
density	<i>d</i>	kilo- prefix	<i>k</i>	temperature, K	<i>T</i>
electromotive force	<i>E</i>	liter	<i>L</i>	time	<i>t</i>
energy of activation	E_a	measure of pressure mm Hg		vapor pressure	VP
enthalpy	<i>H</i>	milli- prefix	<i>m</i>	volt	<i>V</i>
entropy	<i>S</i>	molal	<i>m</i>	volume	<i>V</i>
equilibrium constant	<i>K</i>	molar	<i>M</i>	year	<i>y</i>

CONSTANTS
$R = 8.314 \text{ J mol}^{-1} \text{ K}^{-1}$
$R = 0.08314 \text{ L bar mol}^{-1} \text{ K}^{-1}$
$F = 96,500 \text{ C mol}^{-1}$
$F = 96,500 \text{ J V}^{-1} \text{ mol}^{-1}$
$N_A = 6.022 \times 10^{23} \text{ mol}^{-1}$
$h = 6.626 \times 10^{-34} \text{ J s}$
$c = 2.998 \times 10^8 \text{ m s}^{-1}$
$0 \text{ }^\circ\text{C} = 273.15 \text{ K}$
$1 \text{ atm} = 1.013 \text{ bar} = 760 \text{ mm Hg}$
Specific heat capacity of $\text{H}_2\text{O} = 4.184 \text{ J g}^{-1} \text{ K}^{-1}$

EQUATIONS		
$E = E^\circ - \frac{RT}{nF} \ln Q$	$\ln K = \left(\frac{-\Delta H^\circ}{R} \right) \left(\frac{1}{T} \right) + \text{constant}$	$\ln \left(\frac{k_2}{k_1} \right) = \frac{E_a}{R} \left(\frac{1}{T_1} - \frac{1}{T_2} \right)$

PERIODIC TABLE OF THE ELEMENTS

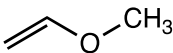
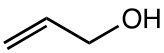

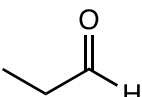
1																		18																	
1A																		8A																	
1 H 1.008																		2 He 4.003																	
3 Li 6.941	4 Be 9.012															5 B 10.81	6 C 12.01	7 N 14.01	8 O 16.00	9 F 19.00	10 Ne 20.18														
11 Na 22.99	12 Mg 24.31	3 B	4 Al	5 Si	6 P	7 S	8 Cl	9 Ar	10 K	11 Ca	12 Sc	13 Ti	14 V	15 Cr	16 Mn	17 Fe	18 Co	19 Ni	20 Cu	21 Zn	22 Ga	23 Ge	24 As	25 Se	26 Br	27 Kr									
37 Rb 85.47	38 Sr 87.62	39 Y 88.91	40 Zr 91.22	41 Nb 92.91	42 Mo 95.95	43 Tc (98)	44 Ru 101.1	45 Rh 102.9	46 Pd 106.4	47 Ag 107.9	48 Cd 112.4	49 In 114.8	50 Sn 118.7	51 Sb 121.8	52 Te 127.6	53 I 126.9	54 Xe 131.3																		
55 Cs 132.9	56 Ba 137.3	57 La 138.9	72 Hf 178.5	73 Ta 180.9	74 W 183.8	75 Re 186.2	76 Os 190.2	77 Ir 192.2	78 Pt 195.1	79 Au 197.0	80 Hg 200.6	81 Tl 204.4	82 Pb 207.2	83 Bi 209.0	84 Po (209)	85 At (210)	86 Rn (222)																		
87 Fr (223)	88 Ra (226)	89 Ac (227)	104 Rf (261)	105 Db (262)	106 Sg (263)	107 Bh (262)	108 Hs (265)	109 Mt (266)	110 Ds (281)	111 Rg (272)	112 Cn (285)	113 Nh (286)	114 Fl (289)	115 Mc (289)	116 Lv (293)	117 Ts (294)	118 Og (294)																		

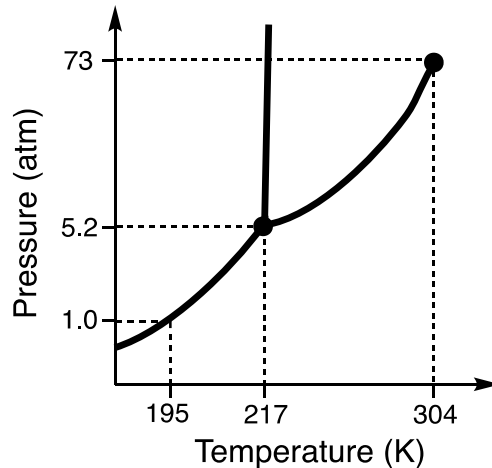
58 Ce 140.1	59 Pr 140.9	60 Nd 144.2	61 Pm (145)	62 Sm 150.4	63 Eu 152.0	64 Gd 157.3	65 Tb 158.9	66 Dy 162.5	67 Ho 164.9	68 Er 167.3	69 Tm 168.9	70 Yb 173.0	71 Lu 175.0
90 Th 232.0	91 Pa 231.0	92 U 238.0	93 Np (237)	94 Pu (244)	95 Am (243)	96 Cm (247)	97 Bk (247)	98 Cf (251)	99 Es (252)	100 Fm (257)	101 Md (258)	102 No (259)	103 Lr (262)

DIRECTIONS

- When you have selected your answer to each question, blacken the corresponding space on the answer sheet using a soft, #2 pencil. Make a heavy, full mark, but no stray marks. If you decide to change an answer, erase the unwanted mark very carefully.
- There is only one correct answer to each question. Any questions for which more than one response has been blackened **will not be counted**.
- Your score is based solely on the number of questions you answer correctly. **It is to your advantage to answer every question.**

1. Hydrogen and oxygen gas are combined in a reaction vessel and reacted completely to form water. What volumes of gases (at STP) will give the greatest mass of water?
(A) 1.0 L H₂ and 4.0 L O₂
(B) 2.0 L H₂ and 3.0 L O₂
(C) 3.0 L H₂ and 2.0 L O₂
(D) 4.0 L H₂ and 1.0 L O₂
2. Potassium hydrogen phthalate (KHP, $M = 204$) is a monoprotic acid used as a primary standard in acid-base titrations. It takes 28.15 mL of a solution of Sr(OH)₂ to neutralize 0.402 g KHP. What is the concentration of the Sr(OH)₂ solution?
(A) 0.00197 M (B) 0.0350 M
(C) 0.0700 M (D) 0.100 M
3. 20.0 mL of 0.15 M aqueous Pb(NO₃)₂ and 10.0 mL of 0.35 M aqueous NaBr are mixed, giving a white precipitate. Which ion is LEAST abundant in the supernatant?
(A) Pb²⁺ (B) Na⁺ (C) NO₃⁻ (D) Br⁻
4. A sample of 9.736 g of a lead oxide is reduced completely with excess carbon monoxide to give metallic lead. The resulting gas is bubbled into saturated lime water, resulting in the precipitation of 6.636 g calcium carbonate ($M = 100.09$) after drying. What is the formula of this lead oxide?
(A) PbO (B) Pb₂O₃
(C) Pb₃O₄ (D) Pb₁₂O₁₉
5. A mixture of K₂S, K₂SO₃, and K₂SO₄ is found to contain 60.0% K by mass. What is the mass percent of oxygen in the mixture?
(A) 15.4% (B) 22.3% (C) 30.3% (D) 36.7%
6. A solution of 5.00 g oxalic acid (H₂C₂O₄, $M = 90.04$) in 100.0 g H₂O has a freezing point of -1.31 °C. What is the percent ionization of oxalic acid in this solution? The freezing point depression constant of water is $K_f = 1.86\text{ }^\circ\text{C } m^{-1}$.
(A) 13.5% (B) 26.8% (C) 70.4% (D) 100%
7. Which glassware would be most appropriate for measuring 10.00 mL of distilled water?
(A) A 10-mL test tube
(B) A 25-mL beaker
(C) A 50-mL buret
(D) A 100-mL graduated cylinder
8. A solution that may contain either 0.1 M Ag⁺(aq), 0.1 M Pb²⁺(aq), or both, is treated with 1 M aqueous HCl. A white precipitate forms which does not appear to dissolve in hot water. Which conclusion about the cations present may be drawn?
(A) Only Ag⁺ is present.
(B) Only Pb²⁺ is present.
(C) Ag⁺ is present, and Pb²⁺ may be present.
(D) Pb²⁺ is present, and Ag⁺ may be present.
9. Addition of 10 mL of distilled water to 0.1 g of which salt produces a yellow, slightly cloudy solution?
(A) KMnO₄ (B) FeCl₃
(C) Co(NO₃)₂ (D) CuSO₄

10. The amount of ascorbic acid in a vitamin C tablet is determined by titration with a solution of iodine in aqueous potassium iodide. A small amount of starch is added to the vitamin C solution before the titration. What is the function of the starch?
- (A) It forms an intensely colored complex with triiodide ion.
 (B) It increases the viscosity of the analyte solution.
 (C) It catalyzes the dissociation of triiodide into iodine and iodide.
 (D) It binds to the inert ingredients of the vitamin C tablet.
11. When blue solid $\text{CuSO}_4 \cdot 5 \text{H}_2\text{O}$ is heated, it turns white. Which is the best explanation for this observation?
- (A) Heating causes water molecules bonded to copper to be replaced by sulfate, lowering the energy of the light absorbed.
 (B) Heating causes an expansion of the lattice, leading to a decrease in the coordination number of copper and raising the energy of the light absorbed.
 (C) Heating causes reduction of copper(II) to copper(I).
 (D) Heating causes reduction of sulfate to sulfite.
12. A student performs an experiment to determine the concentration of a colored salt solution by measuring the absorbance of the solution at the wavelength of maximum absorbance of the salt (λ_{max}) and using Beer's Law to calculate the concentration. Which of the following could cause the measured concentration to be higher than the actual concentration?
- (A) The cuvette is not rinsed with the salt solution after being washed.
 (B) The cuvette is not wiped off before it is inserted into the spectrophotometer.
 (C) Less than the recommended volume of salt solution is added to the cuvette.
 (D) The spectrometer is set to a wavelength different from λ_{max} .
13. Which $\text{C}_3\text{H}_6\text{O}$ isomer has the lowest normal boiling point?
- (A)  (B) 
 (C)  (D) 
14. Dichloromethane (CH_2Cl_2 , $M = 84.93$) is a volatile liquid with a vapor pressure of 0.53 atm at 24 °C. 13.8 g of dichloromethane is introduced into a 5.0-L evacuated container maintained at 24 °C. Which is the best description of the system at equilibrium?
- (A) One-third of the CH_2Cl_2 has evaporated.
 (B) Two-thirds of the CH_2Cl_2 has evaporated.
 (C) All of the CH_2Cl_2 has evaporated to give a pressure of 0.53 atm.
 (D) All of the CH_2Cl_2 has evaporated to give a pressure of 0.79 atm.
15. A piece of solid CO_2 initially at -78 °C is placed in a small plastic container, which is then sealed and allowed to warm up in a room whose temperature is 22 °C. Ultimately the plastic container explodes, ending any further observations. Which statement best describes the possibility of observing liquid CO_2 before the container explodes? (The phase diagram of CO_2 is shown below.)

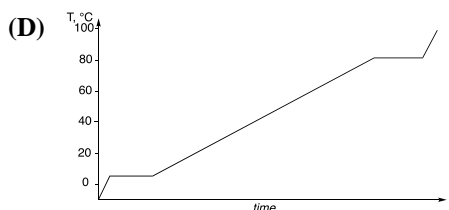
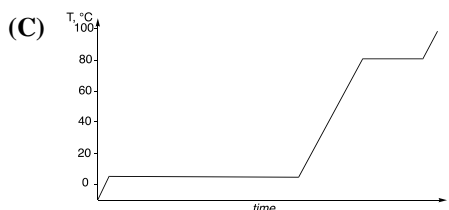
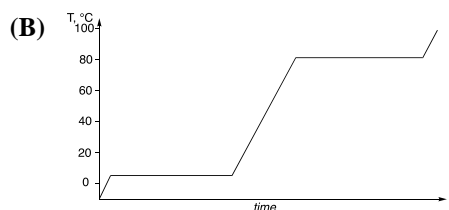
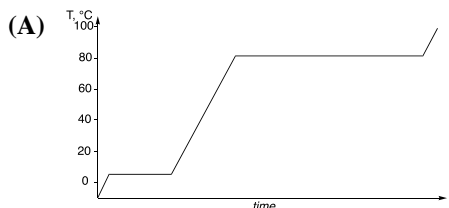


- (A) Liquid CO_2 must be observable, since the explosion is driven by hydrostatic pressure of liquid CO_2 .
 (B) Liquid CO_2 may be observed, since the triple point may be reached during this experiment.
 (C) Liquid CO_2 may not be observed, since only sublimation of solid CO_2 is possible under the conditions of the experiment.
 (D) Liquid CO_2 may not be observed, but supercritical CO_2 may be observed.
16. A solid calcium boride CaB_x has a density of 2.45 g cm^{-3} . It has a primitive cubic lattice with an edge length $a = 415 \text{ pm}$ and with one calcium atom per unit cell. What is the value of x ?
- (A) 2 (B) 4 (C) 6 (D) 8

17. The lattice enthalpy of Na_2O is $-2600 \text{ kJ mol}^{-1}$ while the lattice enthalpy of MgO is $-3900 \text{ kJ mol}^{-1}$. Which factors contribute to the larger magnitude of the lattice enthalpy of MgO ?

I. Mg^{2+} has a larger charge than Na^+ .
 II. Mg^{2+} is smaller than Na^+ .

- (A) I only (B) II only
 (C) Both I and II (D) Neither I nor II
18. A sample of benzene (C_6H_6) is heated at a constant rate. Which graph most accurately represents how the temperature changes with time?

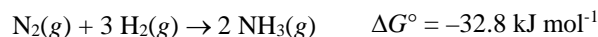


19. An insulated container holds 100.0 g of water at 25.0°C . A 100.0 g piece of copper at 50.0°C is added to the container. What is the final temperature of the mixture in the container at equilibrium? The specific heat capacity of copper is $0.385 \text{ J g}^{-1} \text{ K}^{-1}$.
- (A) 27.1°C (B) 27.5°C
 (C) 34.9°C (D) 37.5°C

20. At the triple point of water (0.01°C , 0.006 atm), in which phase would 1.0 mol of water have the lowest entropy?
- (A) Solid
 (B) Liquid
 (C) Gas
 (D) It would have the same entropy in all three phases.
21. The standard enthalpy of formation of $\text{NO}_2(\text{g})$ is 33.1 kJ mol^{-1} . What is the average bond dissociation enthalpy of a nitrogen-oxygen bond in $\text{NO}_2(\text{g})$?

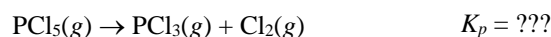
Bond	Bond dissociation enthalpy, kJ mol^{-1}
$\text{N}\equiv\text{N}$	945.4
$\text{O}=\text{O}$	498.4

- (A) $469.0 \text{ kJ mol}^{-1}$ (B) $502.1 \text{ kJ mol}^{-1}$
 (C) $705.4 \text{ kJ mol}^{-1}$ (D) $738.5 \text{ kJ mol}^{-1}$
22. The formation of ammonia from nitrogen and hydrogen has a standard free energy change of $-32.8 \text{ kJ mol}^{-1}$ at 298 K .



What is ΔG at 298 K if the partial pressures of all three gases are 3.00 bar ?

- (A) $-30.1 \text{ kJ mol}^{-1}$ (B) $-32.8 \text{ kJ mol}^{-1}$
 (C) $-35.5 \text{ kJ mol}^{-1}$ (D) $-38.2 \text{ kJ mol}^{-1}$
23. What is K_p for the dissociation of $\text{PCl}_5(\text{g})$ at 298 K ?

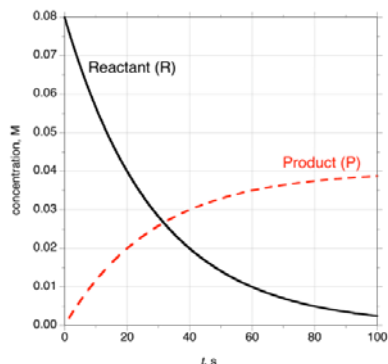


Substance	ΔG_f° , kJ mol^{-1}
$\text{PCl}_5(\text{g})$	-325
$\text{PCl}_3(\text{g})$	-286

- (A) 1.8×10^{-16} (B) 5.9×10^{-11}
 (C) 6.0×10^{-9} (D) 1.5×10^{-7}
24. A reaction has $K_{\text{eq}} = 0.10$ at 300 K and $K_{\text{eq}} = 0.50$ at 330 K . Which statements about this reaction in this temperature range must be correct?
- I. $\Delta H^\circ_{\text{rxn}} > 0$
 II. $\Delta S^\circ_{\text{rxn}} > 0$
- (A) I only (B) II only
 (C) Both I and II (D) Neither I nor II

25. The time course of a reaction in which a reactant R is converted to a product P is shown below. Which statements about the reaction are correct?

- I. The reaction is first order in R.
 II. Two moles of P are formed for every mole of R that reacts.

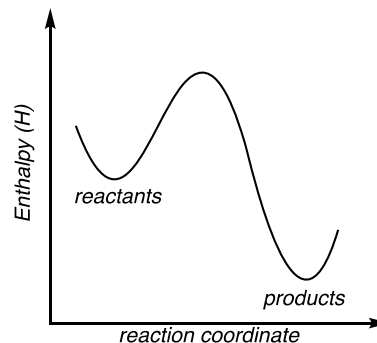


- (A) I only (B) II only
 (C) Both I and II (D) Neither I nor II
26. In a reaction $A + 2 B \rightarrow C + D$, initial rates were measured as shown in the table. What is the initial rate of the reaction with $[A]_0 = 0.200 \text{ M}$ and $[B]_0 = 0.400 \text{ M}$?

$[A]_0, \text{ M}$	$[B]_0, \text{ M}$	Initial rate, M s^{-1}
0.120	0.300	1.80×10^{-5}
0.180	0.450	4.05×10^{-5}
0.080	0.200	8.00×10^{-6}
0.200	0.400	???

- (A) $3.20 \times 10^{-5} \text{ M s}^{-1}$
 (B) $4.00 \times 10^{-5} \text{ M s}^{-1}$
 (C) $5.00 \times 10^{-5} \text{ M s}^{-1}$
 (D) It cannot be determined from the information given.
27. The temperature-dependence of the rate constants of a series of six related reactions are studied, and the reactions are all found to have the same rate constant at 370 K (their isokinetic temperature). Which statement best describes the relationship between the reactions' Arrhenius pre-factors A and their activation energies E_a ?
- (A) The reactions share a common pre-factor A but differ in their activation energies E_a .
 (B) The reactions share a common activation energy E_a but differ in their pre-factors A .
 (C) As the reactions' pre-factors A increase, their activation energies E_a increase.
 (D) As the reactions' pre-factors A increase, their activation energies E_a decrease.

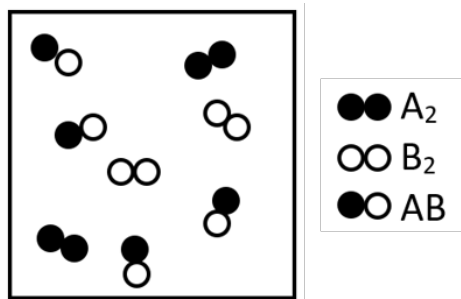
28. Which properties of the reaction whose reaction coordinate is shown below increase with increasing temperature?



- I. The forward rate constant of the reaction, k_f
 II. The equilibrium constant of the reaction, K_{eq}
- (A) I only (B) II only
 (C) Both I and II (D) Neither I nor II
29. The hydrolysis of formamide to formate ion in basic aqueous solution is proposed to proceed by the following steps:
- $$\text{HCONH}_2 + \text{OH}^- \rightleftharpoons \text{HCO(OH)(NH}_2\text{)}^- \quad \text{unfavorable}$$
- $$\text{HCO(OH)(NH}_2\text{)}^- + \text{OH}^- \rightleftharpoons \text{HCO}_2\text{(NH}_2\text{)}^{2-} + \text{H}_2\text{O} \quad \text{fast, unfavorable}$$
- $$\text{HCO}_2\text{(NH}_2\text{)}^{2-} \rightarrow \text{HCO}_2^- + \text{NH}_2^- \quad \text{irreversible}$$
- $$\text{NH}_2^- + \text{H}_2\text{O} \rightarrow \text{NH}_3 + \text{OH}^- \quad \text{fast, favorable}$$
- Which of the following statements is necessarily true, given this mechanism?
- (A) The reaction is first-order in HCONH_2 .
 (B) The reaction is first-order in hydroxide ion.
 (C) HCO_2^- is an intermediate in this reaction.
 (D) If the reaction is carried out in deuterium oxide, the formate ion will contain deuterium.

30. An irreversible reaction $A + B \rightarrow C$ is first-order in both A and B. In a solution with $[A]_0 = 0.20 \text{ M}$, it takes 37 s for the concentration of B to decrease from its initial value of 0.010 M to 0.0050 M. How long will it take the concentration of B to decrease from an initial value of 0.010 M to 0.0050 M if the initial concentration of A is 0.010 M?
- (A) 37 s (B) 110 s (C) 740 s (D) 1100 s
31. What is the percent ionization of a 0.10 M solution of nitrous acid (HNO_2 , $K_a = 7.2 \times 10^{-4}$)?
- (A) 1.1% (B) 3.6% (C) 8.1% (D) 14%

32. The reaction mixture below represents the reaction $A_2(g) + B_2(g) \rightleftharpoons 2 AB(g)$ with $K_{eq} = 2.5$. Which statement correctly describes the situation?

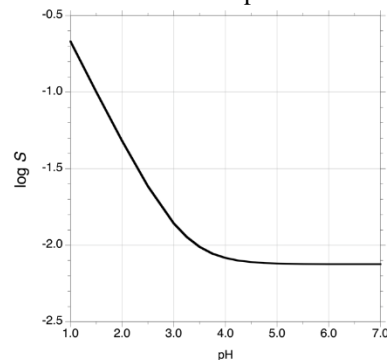


- (A) The reaction is at equilibrium.
 (B) The reaction will shift to produce more products.
 (C) The reaction will shift to produce more reactants.
 (D) Not enough information is given to make a prediction.
33. The hydrogenation of carbon monoxide represented below is exothermic.
- $$CO(g) + 2 H_2(g) \rightleftharpoons CH_3OH(l) \quad \Delta H^\circ_{rxn} < 0$$
- Which changes will increase the equilibrium yield of CH_3OH ?
- I. Increasing the temperature of the system
 II. Removing some of the $CH_3OH(l)$
- (A) I only (B) II only
 (C) Both I and II (D) Neither I nor II
34. To a solution that is 0.010 M each in fluoride, sulfite, and phosphate ions is added dropwise a 1.00 M solution of $CaCl_2$. In what order will the solids precipitate?

Solid	K_{sp}
$CaSO_3$	6.8×10^{-8}
CaF_2	5.3×10^{-9}
$Ca_3(PO_4)_2$	1.0×10^{-25}

- (A) First $Ca_3(PO_4)_2$, then CaF_2 , last $CaSO_3$
 (B) First $Ca_3(PO_4)_2$, then $CaSO_3$, last CaF_2
 (C) First $CaSO_3$, then CaF_2 , last $Ca_3(PO_4)_2$
 (D) First CaF_2 , then $CaSO_3$, last $Ca_3(PO_4)_2$

35. The graph shows the logarithm of the molar solubility S of an ionic solid as a function of pH. Which solid is it?



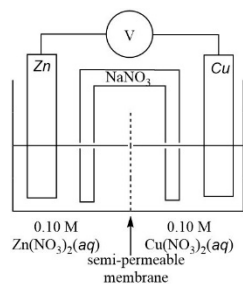
- (A) $Ag_2C_2O_4$ (B) $AlPO_4$
 (C) $SrSO_4$ (D) BaF_2
36. Some solid silver nitrate is dissolved in 100.0 mL of 1.00 M NH_3 solution. To this solution, 50.0 mL of 1.00 M $NaCl$ solution must be added to see the first sign of cloudiness. How much $AgNO_3$ was present? The K_{sp} of $AgCl$ is 1.8×10^{-10} and the K_f of $Ag(NH_3)_2^+$ is 1.0×10^8 .
- (A) 8.1×10^{-11} mol (B) 2.1×10^{-3} mol
 (C) 3.2×10^{-3} mol (D) 4.9×10^{-3} mol
37. In basic solution, $Cl_2(g)$ disproportionates to form $Cl^-(aq)$ and $ClO_3^-(aq)$. What is the mole ratio of $Cl^-(aq)$ to $ClO_3^-(aq)$ produced in this reaction?
- (A) 5:1 (B) 4:1 (C) 3:1 (D) 3:2
38. What are the oxidation states of the sulfur atoms in the thiosulfate ion, $S_2O_3^{2-}$?
- (A) Both sulfur atoms have an oxidation state of +2.
 (B) Both sulfur atoms have an oxidation state of +3.
 (C) One sulfur atom has an oxidation state of +5 and one has an oxidation state of -1.
 (D) One sulfur atom has an oxidation state of +6 and one has an oxidation state of -2.
39. A new electrode material is being tested for its ability to selectively reduce oxygen gas to hydrogen peroxide. After running an electrolytic cell using this electrode for 110.0 minutes at a current of 0.150 A, the solution in the cathode compartment is analyzed and is found to contain 2.00×10^{-3} mol H_2O_2 . What is the percent yield of H_2O_2 based on the current passed through the cell (the faradaic yield)?
- (A) 19.5% (B) 39.0% (C) 78.0% (D) 100%

40. What is the K_{sp} of AgI at 298 K?

Half-reaction	E° , V
$\text{Ag}^+(aq) + e^- \rightarrow \text{Ag}(s)$	+0.80
$\text{AgI}(s) + e^- \rightarrow \text{Ag}(s) + \text{I}^-(aq)$	-0.15

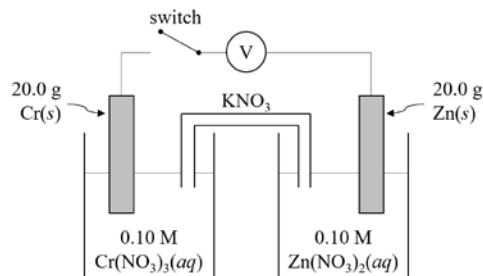
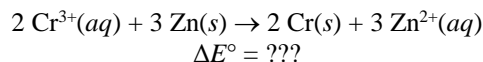
- (A) 4.8×10^{-26} (B) 1.0×10^{-22}
 (C) 8.5×10^{-17} (D) 1.0×10^{-11}

41. In the diagram below, an electrochemical cell's anode and cathode are linked by a semi-permeable membrane that allows only water to pass. The concentrations of $\text{Zn}(\text{NO}_3)_2(aq)$ and $\text{Cu}(\text{NO}_3)_2(aq)$ are initially each 0.10 M. Which of the following diagrams best shows the water levels in each cell at equilibrium?



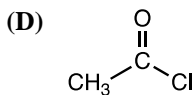
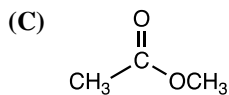
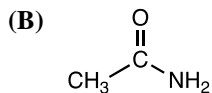
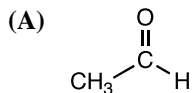
- (A)
 (B)
 (C)
 (D)

42. Consider the voltaic cell below at 25 °C with 1.00 L of solution in each half-cell. When the switch is closed, the mass of the Cr(s) electrode increases until the cell is fully discharged (i.e., $\Delta E = 0$ V). If the final mass of Cr(s) is 24.50 g, what is ΔE° at 25 °C for the reaction shown below?

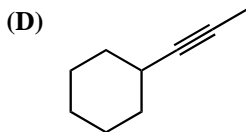
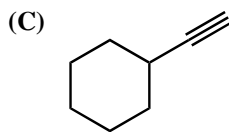
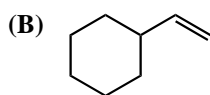
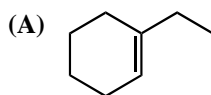


- (A) 0.012 V (B) 0.018 V
 (C) 0.024 V (D) 0.054 V
43. How many orbitals are occupied by at least one electron in the ground state of a gas-phase Si atom?
 (A) 3 (B) 5 (C) 7 (D) 8
44. Which transition of a hydrogen atom would involve absorbing a photon with the longest wavelength?
 (A) $n = 1 \rightarrow n = 3$ (B) $n = 2 \rightarrow n = 6$
 (C) $n = 3 \rightarrow n = 1$ (D) $n = 6 \rightarrow n = 2$
45. Which gas-phase ion has the greatest number of unpaired electrons in its ground state?
 (A) Cr^{2+} (B) Co^{2+} (C) Ni^{2+} (D) Zn^{2+}
46. The ionization energy of which element is closest to that of fluorine (F)?
 (A) O (B) Ne (C) Cl (D) Ar
47. By what mode does the isotope ^{79}Se undergo radioactive decay?
 (A) Alpha decay (B) Beta decay
 (C) Gamma decay (D) Electron capture

58. Which compound would have the lowest C=O stretching frequency in its infrared spectrum?



59. Which compound reacts fastest with aqueous acid?



60. How many possible dipeptides can be formed using the twenty commonly occurring amino acids?

- (A) 40 (B) 200 (C) 210 (D) 400

END OF TEST

Olympiad 2021
USNCO National Exam, Part 1
KEY

Number	Answer	Number	Answer
1.	C	31.	C
2.	B	32.	C
3.	D	33.	D
4.	D	34.	B
5.	A	35.	D
6.	B	36.	C
7.	C	37.	A
8.	C	38.	C
9.	B	39.	B
10.	A	40.	C
11.	A	41.	C
12.	B	42.	B
13.	A	43.	D
14.	B	44.	B
15.	B	45.	A
16.	C	46.	D
17.	C	47.	B
18.	A	48.	A
19.	A	49.	A
20.	A	50.	A
21.	A	51.	D
22.	D	52.	C
23.	D	53.	A
24.	C	54.	D
25.	A	55.	B
26.	D	56.	A
27.	C	57.	B
28.	A	58.	B
29.	A	59.	A
30.	D	60.	D